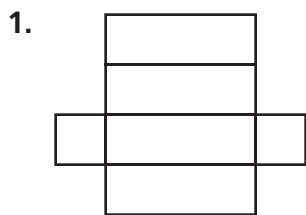


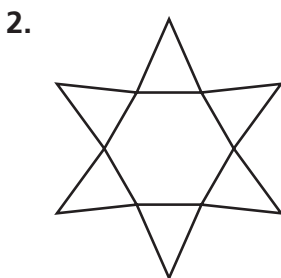
# Practice 10-4

## Space Figures

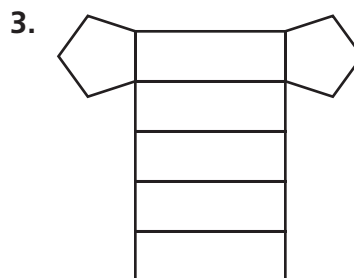
Name the space figure you can form from each net.



\_\_\_\_\_

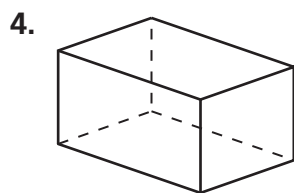


\_\_\_\_\_

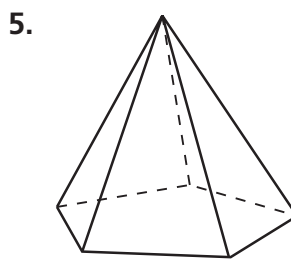


\_\_\_\_\_

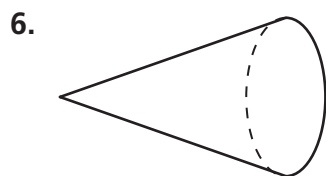
For each figure, describe the base(s) and name the figure.



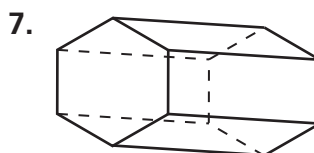
\_\_\_\_\_  
\_\_\_\_\_



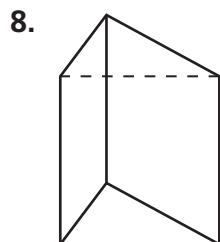
\_\_\_\_\_  
\_\_\_\_\_



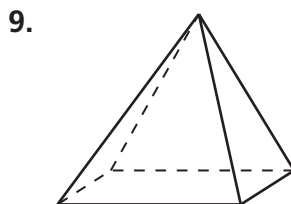
\_\_\_\_\_  
\_\_\_\_\_



\_\_\_\_\_  
\_\_\_\_\_



\_\_\_\_\_  
\_\_\_\_\_



\_\_\_\_\_  
\_\_\_\_\_

All rights reserved.

© Pearson Education, Inc., publishing as Pearson Prentice Hall.